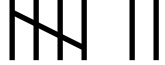





 Name: _____

2.MD.10 Draw a picture graph and a bar graph to represent data.....

Use the data from the tally chart to complete the graph.

Reading	
Math	
Science	
Writing	

Favorite Subject Graph

Reading	
Math	
Science	
Writing	

 = two votes

1. Which subject received the most votes? _____
2. Which subject received the fewest votes? _____
3. How many more votes did Science receive than Writing? =
4. How many people voted? _____