





 Name: _____

2.MD.10 Draw a picture graph and a bar graph to represent data.....

Use the data from the tally chart to complete the pictograph.

Dog	
Cat	
Hamster	
Fish	

Favorite Pet Graph

Dog	
Cat	
Hamster	
Fish	

 = two votes

1. Which pet received the most votes? _____
2. Which pet received the fewest votes? _____
3. How many more votes did a dog receive than a hamster? =
4. How many people voted? _____