




 Name: \_\_\_\_\_

2.MD.10 Draw a picture graph and a bar graph to represent data.....

→ Use the data from the tally chart to complete the graph.

Samoas	
Thin Mints	
Shortbread	
Thanks-A-Lot	
Lemonades	

### Favorite Girl Scout Cookie Graph

Samoas	
Thin Mints	
Shortbread	
Thanks-A-Lot	
Lemonades	

 = two votes

1. Which cookie received the most votes? \_\_\_\_\_

2. Which cookie received the fewest votes? \_\_\_\_\_

3. How many more votes did Thin Mints receive than Lemonades?

(NUMBER SENTENCE) \_\_\_\_\_

4. How many people voted? \_\_\_\_\_