


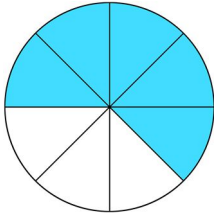


Name: _____

Fractions

 Directions: Write the fraction shaded in unit form and word form

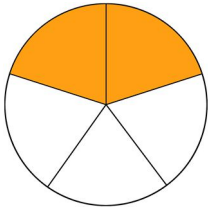
1.



$\frac{5}{8}$

five eighths

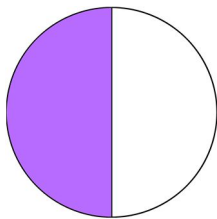
2.



3.



4.








Name: _____

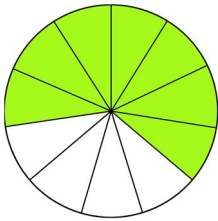
Fractions

 Directions: Write the fraction shaded in unit form and word form

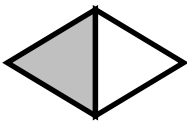
5



6



7.



8.

