




Name: _____

Fractions-Unit Fractions



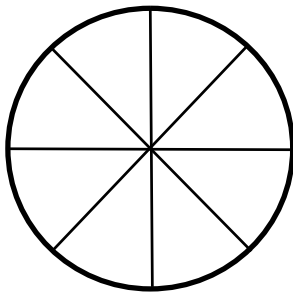
 Determine the unit fraction.

1.

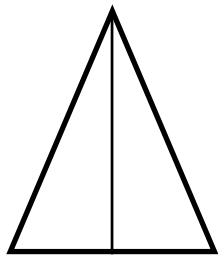


$\frac{1}{5}$

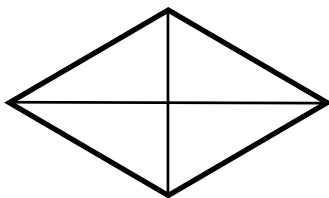
2.



3.




4.





Name: _____

Fractions-Unit Fractions

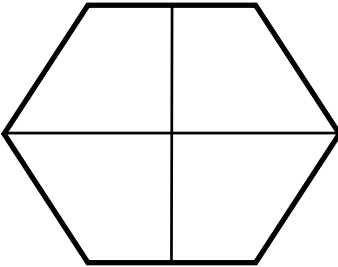


Determine the unit fraction.

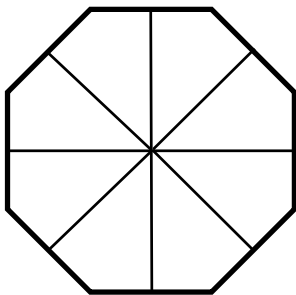
5.



6.



7.



8.