




Name: _____

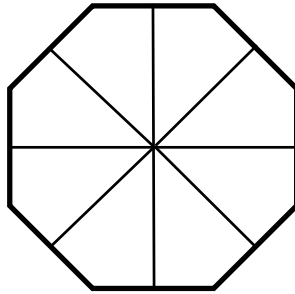
Fractions

 Directions: Shade in parts of the whole to show the fraction.

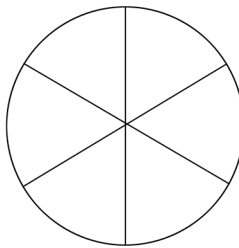
1. $\frac{3}{4}$



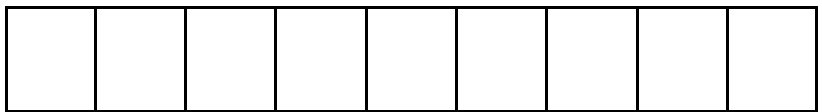
2. $\frac{5}{8}$



3. $\frac{3}{6}$




4. $\frac{4}{9}$



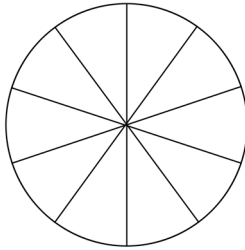


Name: _____

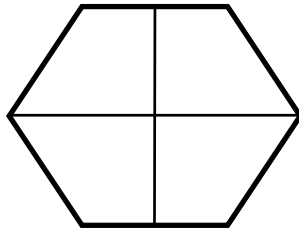
Fractions

 Directions: Shade in parts of the whole to show the fraction.

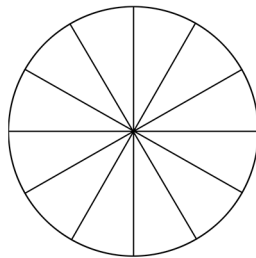
5. $5/10$



6. $1/4$



7. $2/12$



8. $9/15$

