




Name: _____


Fractions

 Directions: Partition and shade the parts of the whole to show the fraction.


1. $\frac{3}{8}$



2. $\frac{1}{4}$



3. $\frac{2}{2}$




4. $\frac{4}{7}$






Name: _____

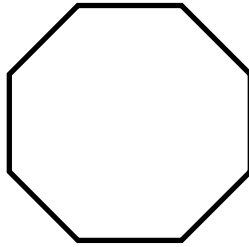
Fractions

 Directions: Partition and shade the parts of the whole to show the fraction.


5. $\frac{1}{3}$



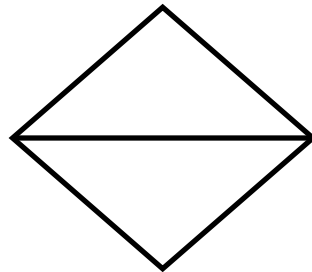
6. $\frac{3}{4}$



7. $\frac{5}{8}$



8. $\frac{2}{4}$



Be a problem solver!