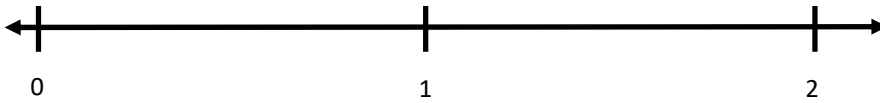





Name: _____

Fractions on a Number Line

1) Partition, label, and plot both fractions on the number line.



2) Partition, label, and plot both fractions on the number line.







Name: _____

Fractions on a Number Line

3) Partition, label, and plot both fractions on the number line.



4) Partition, label, and plot both fractions on the number line.



0

