





Name: _____

Fractions


1. Partition the number into halves. Label each fraction.




2. Partition the number line into thirds. Label each fraction.



3. Partition the number line into fourths. Label each fraction.



4. Partition the number line into fourths. Label each fraction.







Name: _____

Fractions


1. Partition the number into halves. Plot a point at $\frac{5}{2}$ and label it.




2. Partition the number line into thirds. Plot a point at $\frac{5}{3}$ and label it.



3. Partition the number line into fourths. Plot a point at $\frac{8}{4}$ and label it.



4. Partition the number line into thirds. Plot a point at $\frac{8}{3}$ and label it.



5. Partition the number line to halves. Plot a point at $\frac{6}{2}$ and label it.

