




Name: _____

Fractions-How Many Equal Parts

 Determine how many equal parts make up the whole.

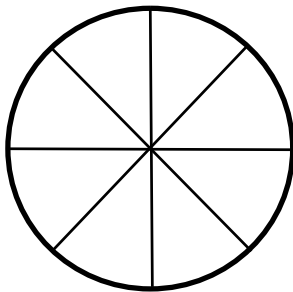


1.



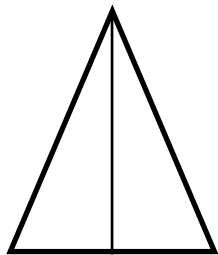
_____ equal parts

2.



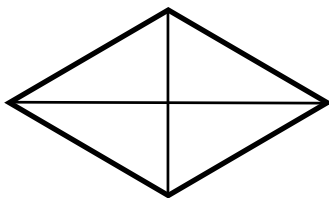
_____ equal parts

3.



_____ equal parts

4.




_____ equal parts



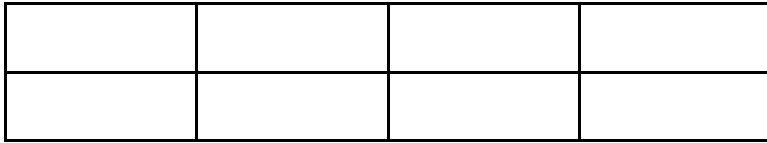
Name: _____

Fractions-How Many Equal Parts



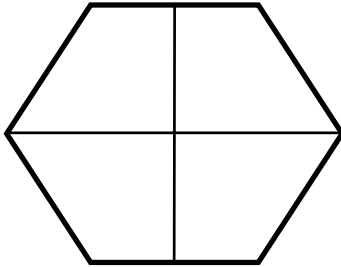
Determine how many equal parts make up the whole.

5.



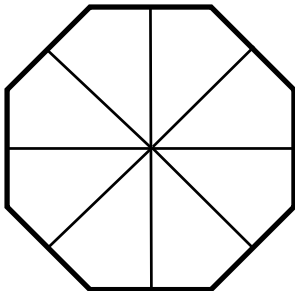
_____ equal parts

6.



_____ equal parts

7.



_____ equal parts

8.



_____ equal parts