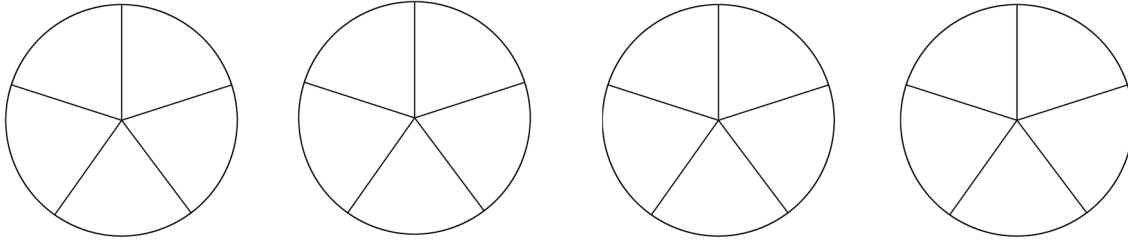




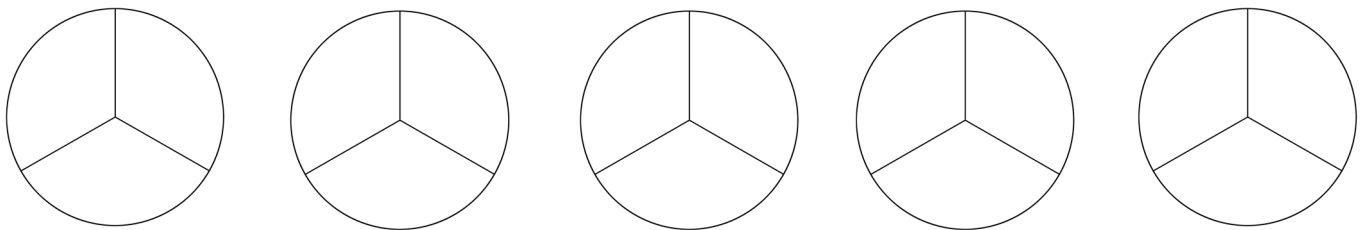
Name: _____

Fractions

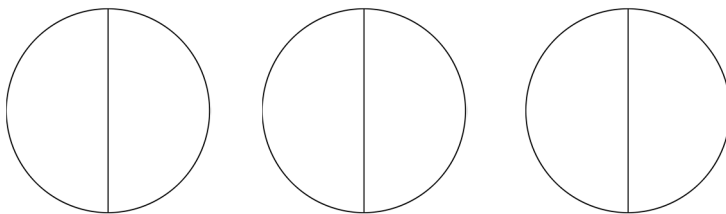
1. Shade $12/5$.



2. Shade $9/3$.



3. Shade $7/2$. *Be a problem solver. 😬



4. Shade $9/4$. *Be a problem solver. 😬

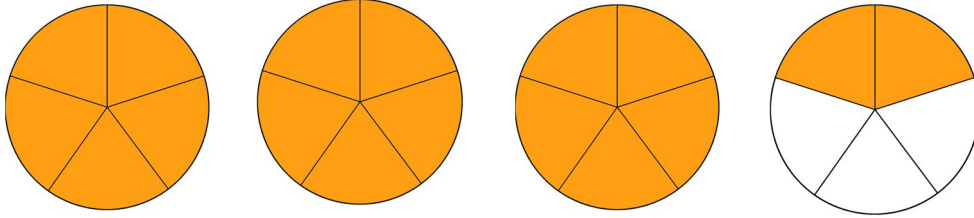




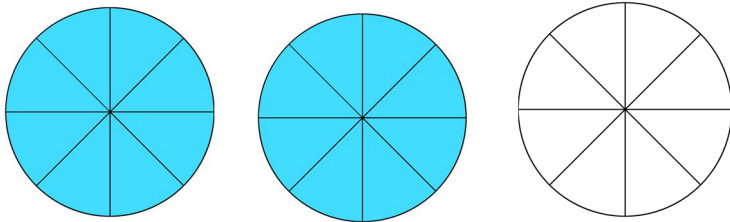
Name: _____

Fractions

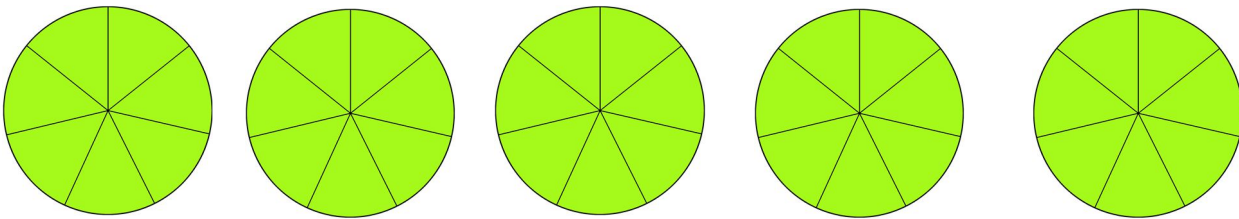
1. Write the fraction shaded. $\frac{\quad}{\quad}$ / $\frac{\quad}{\quad}$



2. Write the fraction shaded. $\frac{\quad}{\quad}$ / $\frac{\quad}{\quad}$



3. Write the fraction shaded. $\frac{\quad}{\quad}$ / $\frac{\quad}{\quad}$



4. Write the fraction shaded. $\frac{\quad}{\quad}$ / $\frac{\quad}{\quad}$

