



Name: _____

Fractions-Equal Parts

 Determine if the shape has all equal parts. Circle the correct answer.

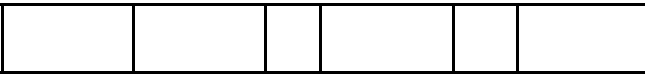
1.



all equal parts

not all equal parts

2.



all equal parts

not all equal parts

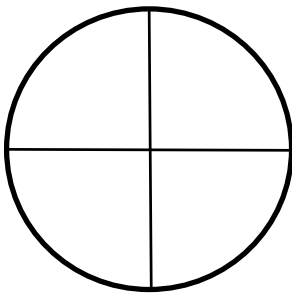
3.



all equal parts


not all equal parts

4.



all equal parts

not all equal parts



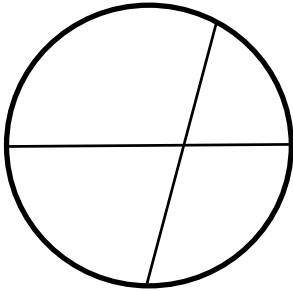


Name: _____

Fractions-Equal Parts

Determine if the shape has all equal parts. Circle the correct answer.

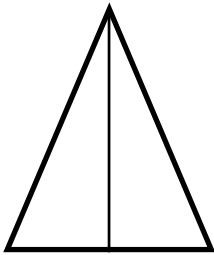
5.



all equal parts

not all equal parts


6.



all equal parts

not all equal parts

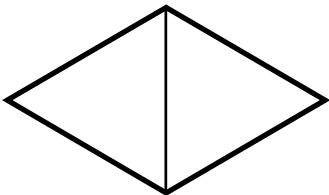
7.



all equal parts

not all equal parts

8.



all equal parts

not all equal parts

