




Name: \_\_\_\_\_

# Domino Fractions


Partition the rectangle(s). Write and shade in the fraction shown on the domino.



$3/6$



/



/






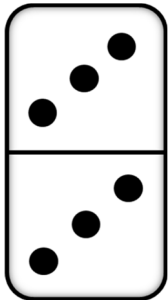
Name: \_\_\_\_\_

# Domino Fractions

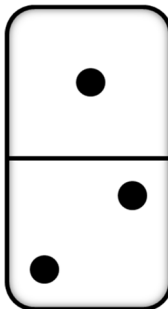
Partition the rectangle(s). Write and shade in the fraction shown on the domino.



/



/



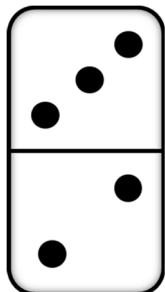
/



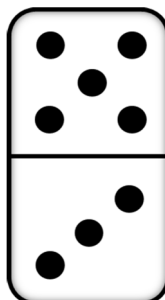


 Name: \_\_\_\_\_

# Domino Fractions

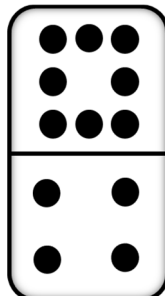
Partition the rectangle(s). Write and shade in the fraction shown on the domino.



/



/



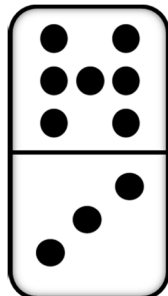
/



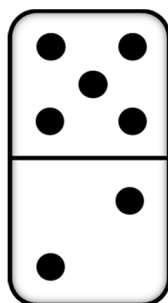



 Name: \_\_\_\_\_

# Domino Fractions

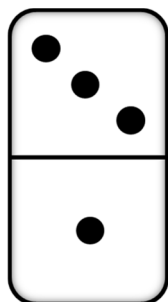
Partition the rectangle(s). Write and shade in the fraction shown on the domino.



/



/



/

