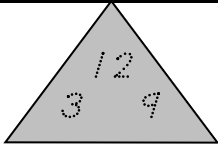
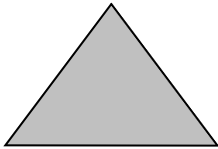
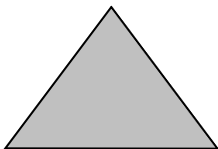

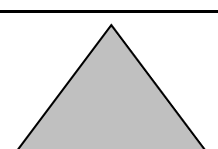


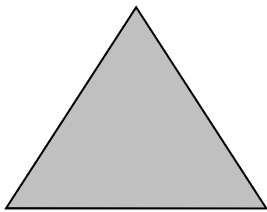
Name \_\_\_\_\_

## Fact Families

Directions: Complete the fact family using the given numbers.

	$3 + \underline{\quad} = 12$	$12 - 9 = \underline{\quad}$	$\underline{\quad} - 9 = 3$
	$6 + 8 = \underline{\quad}$	$14 - 8 = \underline{\quad}$	$8 + 6 = \underline{\quad}$
	$6 + \underline{\quad} = 11$	$\underline{\quad} - 5 = 6$	$11 - 6 = \underline{\quad}$
	$9 - \underline{\quad} = 6$	$3 + \underline{\quad} = 9$	$6 + 3 = \underline{\quad}$
	$17 - 8 = \underline{\quad}$	$8 + 9 = \underline{\quad}$	$\underline{\quad} - 9 = 8$

Make your own fact family problems. Write the numbers in the triangle.

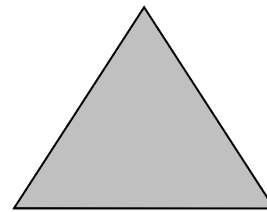


$$\underline{\quad} + \underline{\quad} = \underline{\quad}$$

$$\underline{\quad} + \underline{\quad} = \underline{\quad}$$

$$\underline{\quad} - \underline{\quad} = \underline{\quad}$$

$$\underline{\quad} - \underline{\quad} = \underline{\quad}$$



$$\underline{\quad} + \underline{\quad} = \underline{\quad}$$

$$\underline{\quad} + \underline{\quad} = \underline{\quad}$$

$$\underline{\quad} - \underline{\quad} = \underline{\quad}$$

$$\underline{\quad} + \underline{\quad} = \underline{\quad}$$