


Name _____


Use multiplication and division within 100 to solve

Division

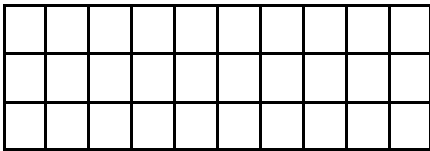
Color the array to find the quotient.




$$12 \div 3 = \underline{\quad}$$




$$20 \div 5 = \underline{\quad}$$




$$18 \div 9 = \underline{\quad}$$



$$40 \div 10 = \underline{\quad}$$



$$24 \div 3 = \underline{\quad}$$



$$24 \div 4 = \underline{\quad}$$

