





 Name: _____

2.MD.10 Draw a picture graph and a bar graph to represent data.....

➔ Use the data from the tally chart to complete the graph.

Reading	
Math	
Science	
Writing	

Favorite Subject Graph

Number	12				
	11				
	10				
	9				
	8				
	7				
	6				
	5				
	4				
	3				
	2				
	1				
#	Reading	Math	Science	Writing	

Subject

 Name: _____

2.MD.10 Draw a picture graph and a bar graph to represent data.....

→ Use the data from the tally chart to complete the graph.

Reading	
Math	
Science	
Writing	

Favorite Subject Graph

Number	12				
	11				
	10				
	9				
	8				
	7				
	6				
	5				
	4				
	3				
	2				
	1				
#	Reading	Math	Science	Writing	

Subject



Name: _____

2.MD.10 Draw a picture graph and a bar graph to represent data.....

⇒ Use the graph to answer the following questions.

1. Which subject received the most number of votes?

2. Which subject received the least number of votes?

3. Did any subjects get the same number of votes? If so, which ones?

4. How many people voted for Math? _____

5. How many people voted for Science? _____

6. How many people voted altogether? _____

7. How many more votes did _____ receive than

_____ ? _____