




Name: \_\_\_\_\_


## 3-Digit Addition


~~6d~~ Directions: Find the sums.



$$\begin{array}{r} 350 \\ + \underline{289} \\ \hline \end{array}$$


$$\begin{array}{r} 238 \\ + \underline{462} \\ \hline \end{array}$$


$$\begin{array}{r} 425 \\ + \underline{267} \\ \hline \end{array}$$


$$\begin{array}{r} 625 \\ + \underline{36} \\ \hline \end{array}$$


$$\begin{array}{r} 543 \\ + \underline{266} \\ \hline \end{array}$$


$$\begin{array}{r} 154 \\ + \underline{128} \\ \hline \end{array}$$

# THANKSGIVING