

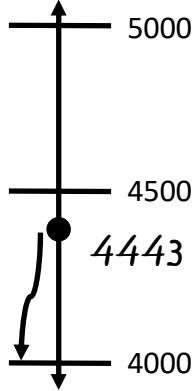


Name: \_\_\_\_\_

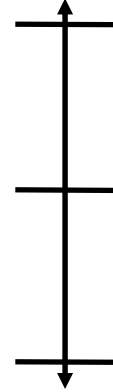
# Rounding to the Nearest Thousand

 Directions: Use the number line to round the numbers to the nearest thousand.

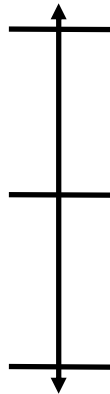
1.  $4443 \approx \underline{4000}$



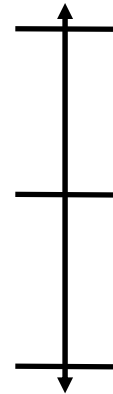
2.  $4367 \approx \underline{\hspace{2cm}}$



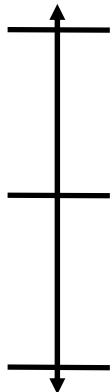
3.  $1871 \approx \underline{\hspace{2cm}}$



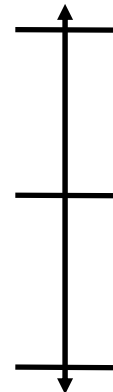
4.  $5555 \approx \underline{\hspace{2cm}}$



5.  $8429 \approx \underline{\hspace{2cm}}$



6.  $3682 \approx \underline{\hspace{2cm}}$



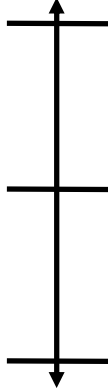


Name: \_\_\_\_\_

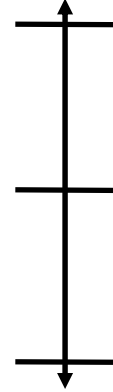
# Rounding to the Nearest THOUSAND

 Directions: Use the number line to round the numbers to the nearest thousand.

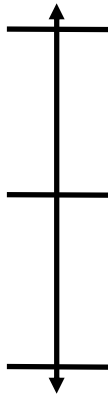
1.  $9264 \approx$  \_\_\_\_\_



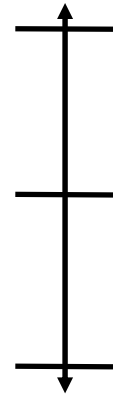
2.  $537 \approx$  \_\_\_\_\_



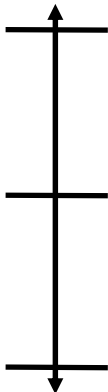
3.  $274 \approx$  \_\_\_\_\_



4.  $4500 \approx$  \_\_\_\_\_



5.  $8936 \approx$  \_\_\_\_\_



6.  $9636 \approx$  \_\_\_\_\_

