


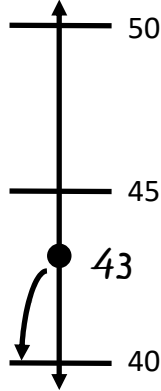


Name: _____

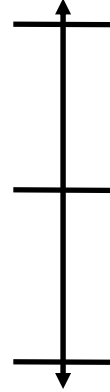
Rounding to the Nearest Ten

 Directions: Use the number line to round the numbers to the nearest ten.

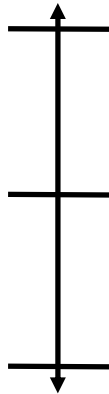
1. $43 \approx \underline{40}$



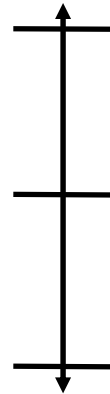
2. $67 \approx \underline{\quad}$



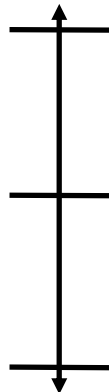
3. $71 \approx \underline{\quad}$



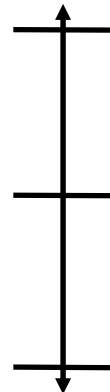
4. $55 \approx \underline{\quad}$



5. $29 \approx \underline{\quad}$




6. $82 \approx \underline{\quad}$



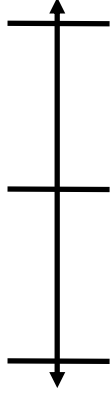


Name: _____

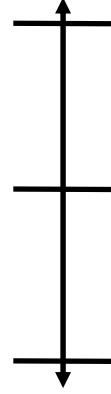
Rounding to the Nearest Ten

 Directions: Use the number line to round the numbers to the nearest ten.

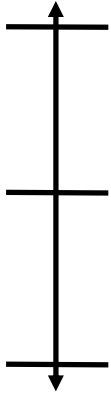
1. $60 \approx$ _____



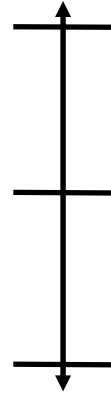
2. $46 \approx$ _____



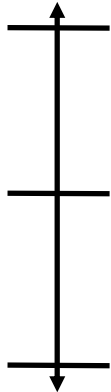
3. $78 \approx$ _____



4. $25 \approx$ _____



5. $3 \approx$ _____



5. $97 \approx$ _____

