


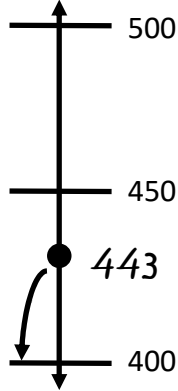


Name: \_\_\_\_\_

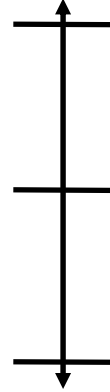
# Rounding to the Nearest Hundred

 Directions: Use the number line to round the numbers to the nearest hundred.

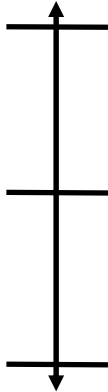
1.  $443 \approx \underline{400}$



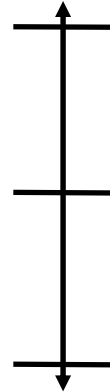
2.  $367 \approx \underline{\quad}$



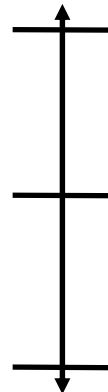
3.  $871 \approx \underline{\quad}$



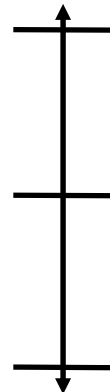
4.  $550 \approx \underline{\quad}$



5.  $429 \approx \underline{\quad}$




6.  $600 \approx \underline{\quad}$



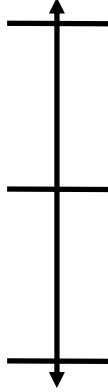


Name: \_\_\_\_\_

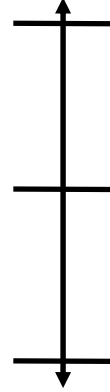
# Rounding to the Nearest Hundred

 Directions: Use the number line to round the numbers to the nearest hundred.

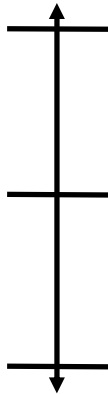
1.  $160 \approx$  \_\_\_\_\_



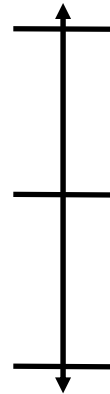
2.  $56 \approx$  \_\_\_\_\_



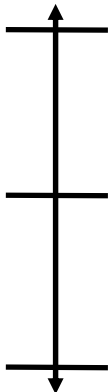
3.  $278 \approx$  \_\_\_\_\_



4.  $925 \approx$  \_\_\_\_\_



5.  $33 \approx$  \_\_\_\_\_



5.  $997 \approx$  \_\_\_\_\_

