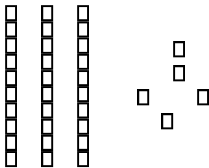


Name \_\_\_\_\_

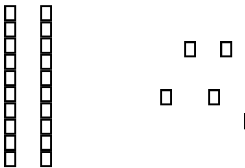
## Place Value

**Directions:** Write how many tens and ones. Then write the number.



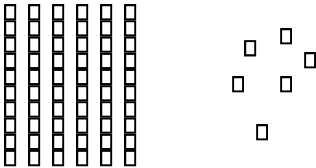
\_\_\_ tens    \_\_\_ ones

\_\_\_ + \_\_\_ = \_\_\_



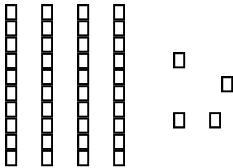
\_\_\_ tens    \_\_\_ ones

\_\_\_ + \_\_\_ = \_\_\_



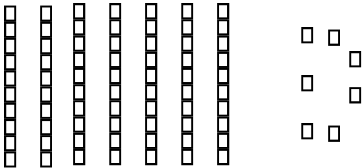
\_\_\_ tens    \_\_\_ ones

\_\_\_ + \_\_\_ = \_\_\_



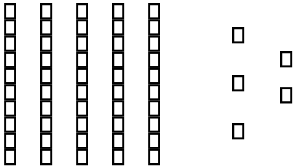
\_\_\_ tens    \_\_\_ ones

\_\_\_ + \_\_\_ = \_\_\_



\_\_\_ tens    \_\_\_ ones

\_\_\_ + \_\_\_ = \_\_\_



\_\_\_ tens    \_\_\_ ones

\_\_\_ + \_\_\_ = \_\_\_