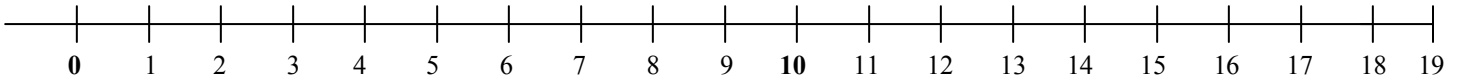


Name: _____

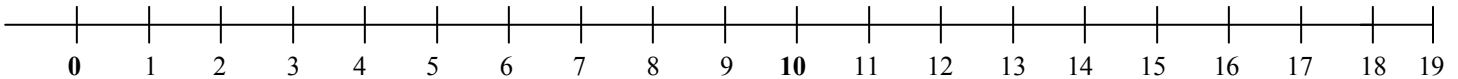
Number Line Subtraction

→ Use the number line below to count back to subtract. Show your work on the number line.

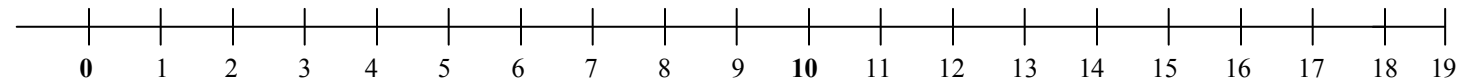
1) $11 - 6 = \underline{\quad}$



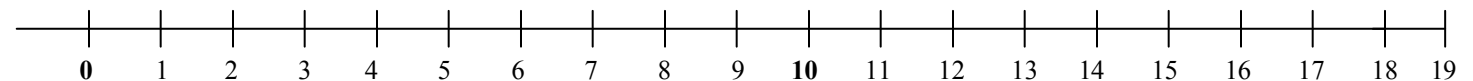
2) $10 - 3 = \underline{\quad}$



3) $15 - 8 = \underline{\quad}$



4) $17 - 9 = \underline{\quad}$



5) $9 - 5 = \underline{\quad}$

