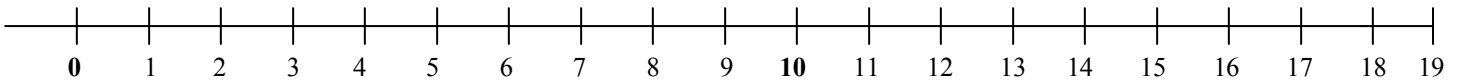


Name: \_\_\_\_\_

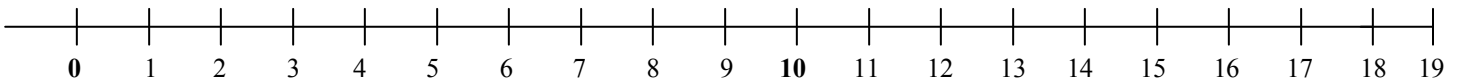
# Number Line Subtraction

→ Use the number line below to count back to subtract. Show your work on the number line.

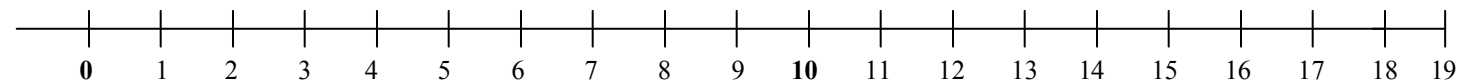
1)  $18 - 12 = \underline{\quad}$



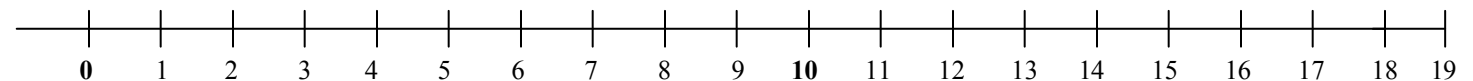
2)  $19 - 8 = \underline{\quad}$



3)  $17 - 11 = \underline{\quad}$



4)  $13 - 8 = \underline{\quad}$



5)  $12 - 5 = \underline{\quad}$

