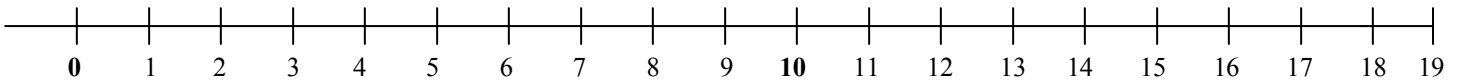


Name: _____

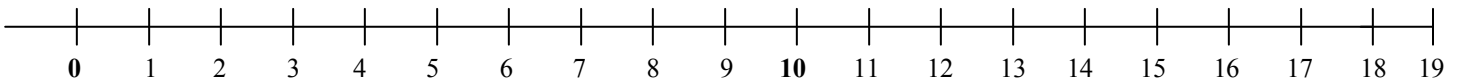
Number Line Subtraction

→ Use the number line below to count back to subtract. Show your work on the number line.

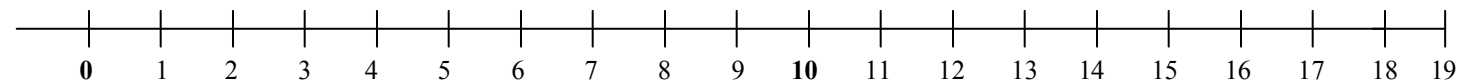
1) $8 - 2 = \underline{\quad}$



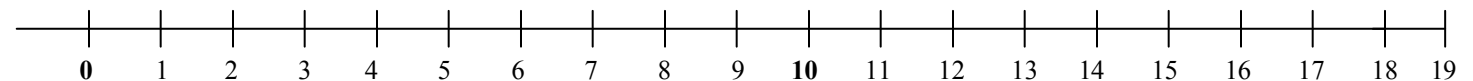
2) $16 - 8 = \underline{\quad}$



3) $14 - 5 = \underline{\quad}$



4) $19 - 11 = \underline{\quad}$



5) $15 - 5 = \underline{\quad}$

