



Name _____


Use multiplication and division within 100 to solve

Multiplication

Write the multiplication problem shown by the array.







Name _____

Use multiplication and division within 100 to solve

Multiplication

Write the multiplication problem shown by the array.

