


Name _____


Use multiplication and division within 100 to solve

Multiplication

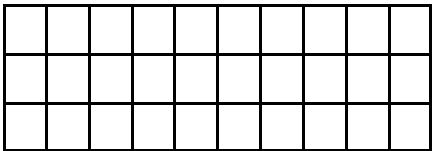
Color the array to find the product.




$$3 \times 4 = \underline{\quad}$$




$$5 \times 5 = \underline{\quad}$$




$$2 \times 9 = \underline{\quad}$$



$$4 \times 10 = \underline{\quad}$$



$$8 \times 3 = \underline{\quad}$$



$$6 \times 4 = \underline{\quad}$$