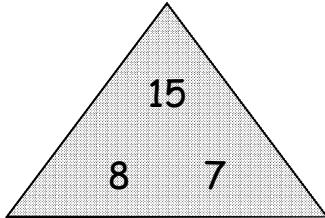


Name: \_\_\_\_\_

## Fact Families

→ Complete the fact family using the given numbers.

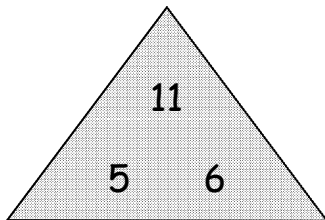


$___ + ___ = ___$

$___ - ___ = ___$

$___ + ___ = ___$

$___ - ___ = ___$

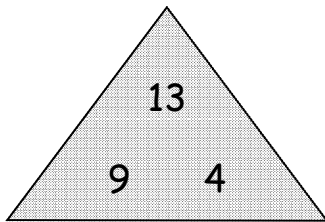


$___ + ___ = ___$

$___ - ___ = ___$

$___ + ___ = ___$

$___ - ___ = ___$

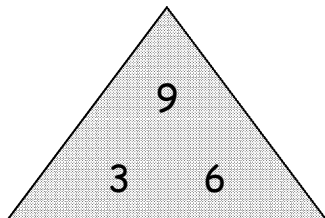


$___ + ___ = ___$

$___ - ___ = ___$

$___ + ___ = ___$

$___ - ___ = ___$

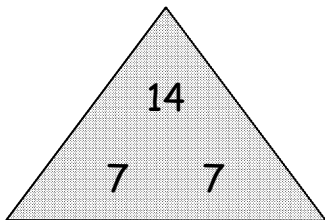


$___ + ___ = ___$

$___ - ___ = ___$

$___ + ___ = ___$

$___ - ___ = ___$



$___ + ___ = ___$

$___ - ___ = ___$

$___ + ___ = ___$

$___ - ___ = ___$