

Name: \_\_\_\_\_

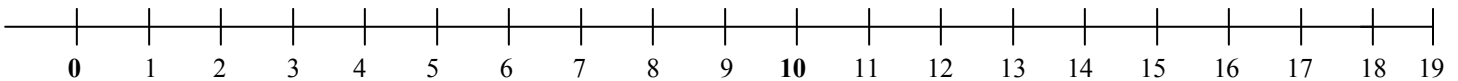
# Number Line Subtraction

→ Use the number line below to count back to subtract. Show your work on the number line.

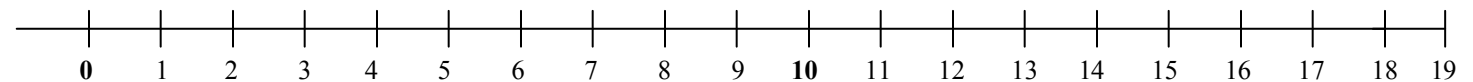
1)  $11 - 6 =$  \_\_\_\_\_



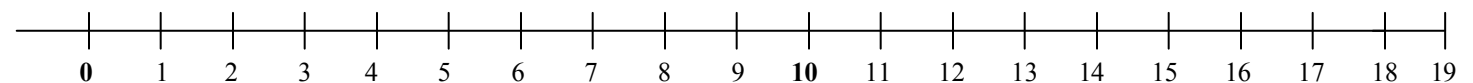
2)  $10 - 3 =$  \_\_\_\_\_



3)  $15 - 8 =$  \_\_\_\_\_



4)  $17 - 9 =$  \_\_\_\_\_



5)  $9 - 5 =$  \_\_\_\_\_

