

Name: _____

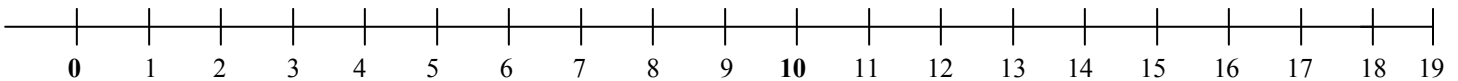
Number Line Subtraction

→ Use the number line below to count back to subtract. Show your work on the number line.

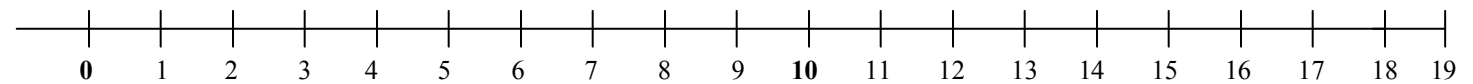
1) $18 - 12 = \underline{\quad}$



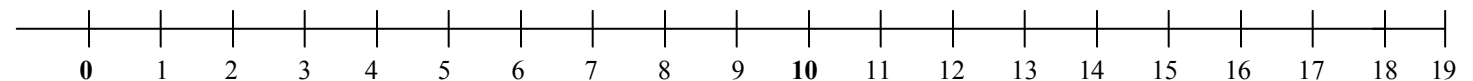
2) $19 - 8 = \underline{\quad}$



3) $17 - 11 = \underline{\quad}$



4) $13 - 8 = \underline{\quad}$



5) $12 - 5 = \underline{\quad}$

