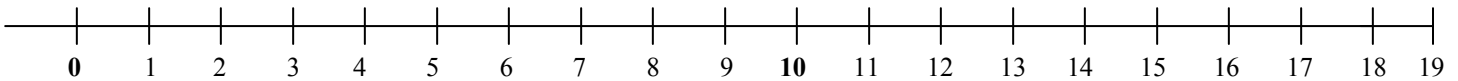


Name: \_\_\_\_\_

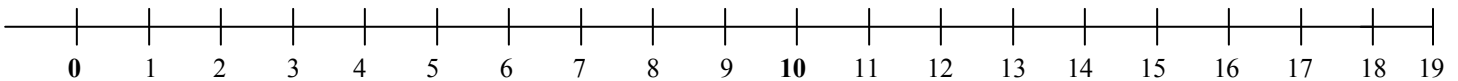
# Number Line Subtraction

→ Use the number line below to count back to subtract. Show your work on the number line.

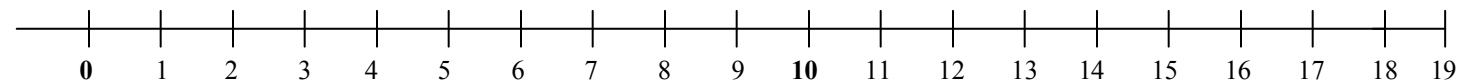
1)  $8 - 2 = \underline{\quad}$



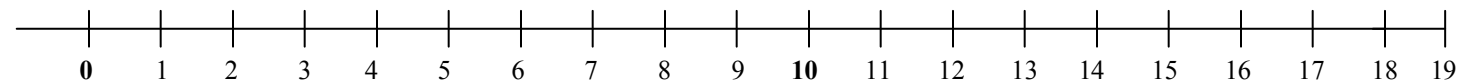
2)  $16 - 8 = \underline{\quad}$



3)  $14 - 5 = \underline{\quad}$



4)  $19 - 11 = \underline{\quad}$



5)  $15 - 5 = \underline{\quad}$

