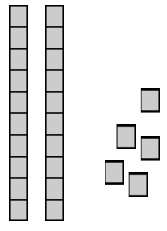
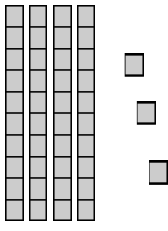


Name: \_\_\_\_\_

## Lessons 1-1---1-7 Review

⇒ Write how many tens and ones. Then write the number.

	__ tens    __ ones ____ + ____ = ____
	__ tens    __ ones ____ + ____ = ____

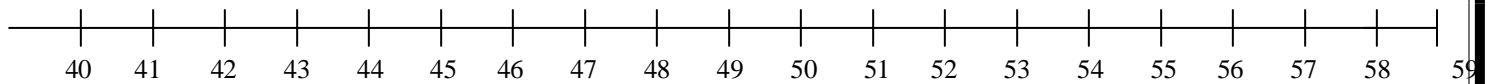
⇒ Write the value of the underlined digit

<u>9</u> 3    ____	2 <u>2</u> ____	<u>6</u> 9    ____	<u>1</u> 5    ____
--------------------	-----------------	--------------------	--------------------

⇒ Write each number.

sixty    _____	eighty-three    _____
----------------	-----------------------

⇒ Fill in the missing numbers.



40, ____, 42	55, ____, 57	____, 46, 47	____, 56, ____
57, 58, ____	____, 51, 52	49, 50, ____	____, ____, 48

⇒ Fill in the missing numbers.

56 ____ 78	34 ____ 18	43 ____ 43	87 ____ 78
65 ____ 68	56 ____ 56	17 ____ 9	48 ____ 34