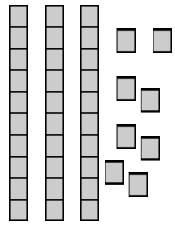
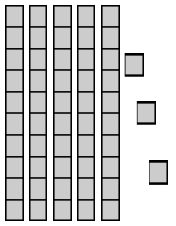


Name: \_\_\_\_\_

## Lessons 1-1---1-6 Review

⇒ Write how many tens and ones. Then write the number.

 ___ tens    ___ ones ___ + ___ = ___	 ___ tens    ___ ones ___ + ___ = ___
--	--

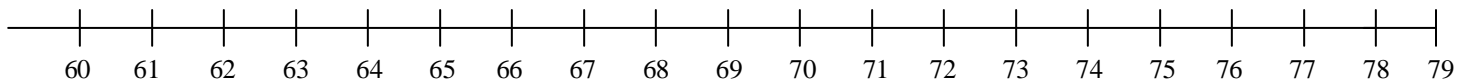
⇒ Write the value of the underlined digit

<u>6</u> 3    _____	<u>2</u> 7    _____	<u>1</u> 9    _____	<u>3</u> 5    _____
---------------------	---------------------	---------------------	---------------------

⇒ Write each number.

thirteen    _____	twenty-three    _____
forty    _____	fifty-six    _____

⇒ Fill in the missing numbers.



60, ____, 62	65, ____, 67	____, 70, 71	____, 75, ____
63, 64, ____	____, 63, 64	77, ____, 79	____, ____, 73