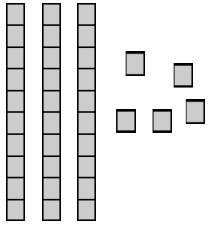


Name: _____

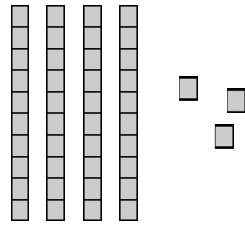
Lessons 1-1---1-2 Review

➡ Write how many tens and ones. Then write the number.



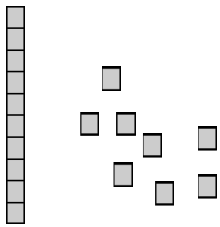
___ tens ___ ones

___ + ___ = ___



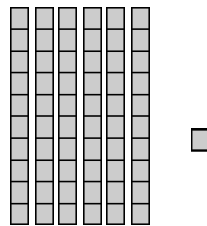
___ tens ___ ones

___ + ___ = ___



___ tens ___ ones

___ + ___ = ___



___ tens ___ ones

___ + ___ = ___

➡ Write the value of the underlined digit

74 _____

23 _____

32 _____

95 _____

63 _____

18 _____

58 _____

89 _____