


Name: \_\_\_\_\_

# Place Value

➔ Write how many tens and ones. Then write the number.




\_\_\_ tens \_\_\_ ones

\_\_\_ + \_\_\_ = \_\_\_




\_\_\_ tens \_\_\_ ones

\_\_\_ + \_\_\_ = \_\_\_




\_\_\_ tens \_\_\_ ones

\_\_\_ + \_\_\_ = \_\_\_



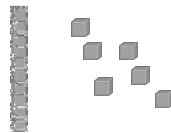
\_\_\_ tens \_\_\_ ones

\_\_\_ + \_\_\_ = \_\_\_



\_\_\_ tens \_\_\_ ones

\_\_\_ + \_\_\_ = \_\_\_



\_\_\_ tens \_\_\_ ones

\_\_\_ + \_\_\_ = \_\_\_